



Identify 2D Shapes


Grade 1

Name: _____

Name the shape shown.


Identify the shape by counting its sides and corners.

(1)




- (A) circle (B) rectangle (C) square
(D) triangle

(2)




- (A) circle (B) diamond (C) oval
(D) triangle

(3)



- (A) circle (B) oval (C) rectangle
(D) triangle

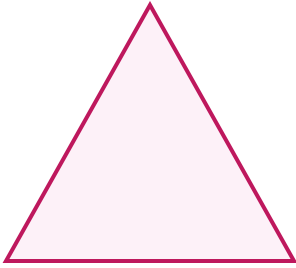
(4)



- (A) circle (B) rectangle (C) square
(D) triangle




(5)




- (A) circle (B) diamond (C) square
(D) triangle

(6)




- (A) oval (B) rectangle (C) square
(D) triangle

(7)



- (A) circle (B) diamond (C) oval
(D) square

(8)



- (A) diamond (B) oval (C) rectangle
(D) triangle

