




# Identifying Shapes

Grade 1

Name: \_\_\_\_\_

Identify the shape. Choose the name.


Count the sides and corners of each shape to help identify it. Remember: triangles have 3 sides, quadrilaterals have 4.



**Example:** What shape is this?

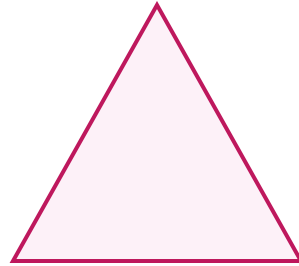
**Answer: Square**

(1)




- (A) circle (B) diamond (C) rectangle  
(D) triangle

(2)




- (A) diamond (B) oval (C) square  
(D) triangle

(3)



- (A) circle (B) diamond (C) rectangle  
(D) square


(4)



- (A) diamond (B) oval (C) rectangle  
(D) square




(5)




- (A) circle (B) diamond (C) oval  
(D) triangle

(6)



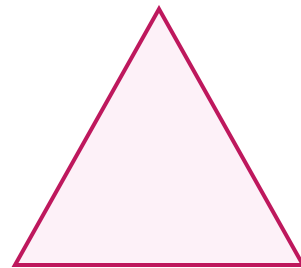
- (A) diamond (B) oval (C) rectangle  
(D) triangle

(7)



- (A) diamond (B) oval (C) rectangle  
(D) square

(8)



- (A) circle (B) diamond (C) oval  
(D) triangle

