



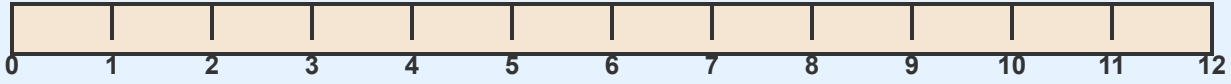
Measure with a Ruler - Nearest Inch

Grade 1

Name: _____

Measure each object to the nearest inch.

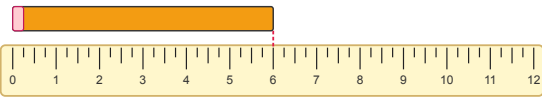
Example: How long is the pencil?



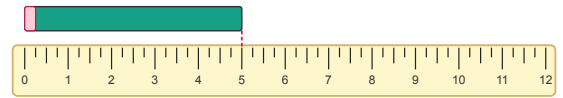
Answer: 5

inches (The pencil reaches from 0 to 5 on the ruler)

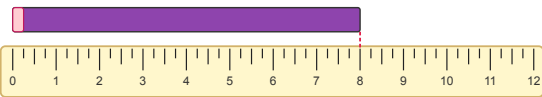
(1)



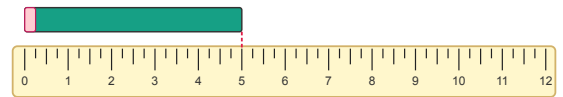
(2)



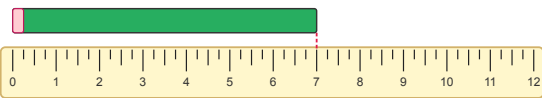
(3)



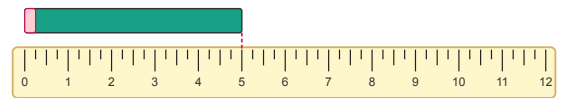
(4)



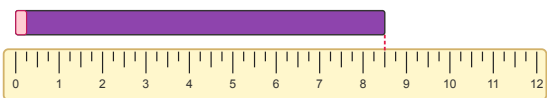
(5)



(6)



(7)



(8)

