



Addition Word Problems: 2-Digit Numbers

Grade 2


Name: _____


Write the addition sentence and solve. Include units.


Example: $23 + 15 = 38$. Answer: 38 apples.

(1) Lily has 27 storybooks. Her friend gives her 37 more storybooks.

How many storybooks does Lily have now? 

(2) Mark collected 17 animal stickers. He then collected 57 more nature stickers. How many stickers does Mark have in total? 

(3) A classroom has 47 red pencils. The teacher adds 27 blue pencils to the collection. How many pencils are there altogether? 

(4) A fruit stand sold 37 apples in the morning. In the afternoon, they sold 47 more apples. How many apples did they sell combined? 



(5) There were 57 birds sitting on a tree. 17 more birds flew to the tree.
How many birds are on the tree now? 🐦

(6) Sarah has a box with 67 crayons. Her mom buys her another box
with 27 crayons. How many crayons does Sarah have in all? 🖍️

(7) A garden has 27 rose bushes. The gardener plants 67 more
sunflower bushes. What is the total number of bushes? 🌸

(8) David has 17 blue marbles. He also has 77 green marbles. How
many marbles does David have altogether? ●

