




Addition Word Problems: Three Addends - Set A


Grade 2


Name: _____


Add three numbers in each word problem. Show work.

Example: Mark found 5 blue marbles, 3 red marbles, and 2 green marbles. How many marbles did Mark find in total? $5 + 3 + 2 = 10$. Answer: 10 marbles.

(1) A small library has 28 adventure books, 35 mystery books, and 32 animal books. How many books are there in total? 

(2) Lily collected 18 toy cars, 24 toy planes, and 36 toy trains. How many toys did she collect altogether? 

(3) A farmer picked 23 apples, 29 pears, and 25 oranges. How many fruits did he pick in all? 

(4) Tom has 31 blue stickers, 27 red stickers, and 24 green stickers. What is the total number of stickers Tom has? 



(5) In the park, there were 15 sparrows, 22 robins, and 38 pigeons.
How many birds were there altogether? 🐦

(6) A box has 26 red crayons, 33 blue crayons, and 19 yellow crayons.
How many crayons are in the box? 🖍️

(7) The art club has 21 students, the music club has 28 students, and
the drama club has 35 students. How many students are in these
clubs? 🎭

(8) For a party, Sarah bought 25 red balloons, 30 blue balloons, and 29
yellow balloons. How many balloons did she buy in total? 🎈

