



# Clocks - Drawing time: Analog Clocks: Draw Half-Hour Times

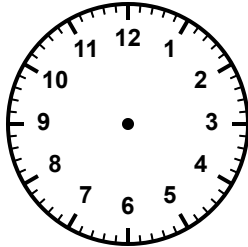
Grade 2

Name: \_\_\_\_\_


Draw clock hands to show the time.

For each time, draw the hour hand halfway between the numbers and the minute hand to 6.

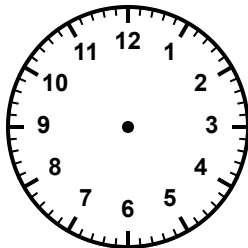
(1) Draw the hands to show 2:30




(2) Show half past 5 on the clock.



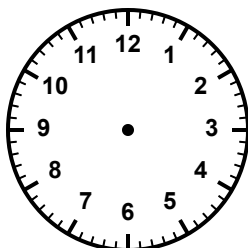
(3) Draw the clock hands for 8:30.



(4) What time is it if it's half past 12?



(5) Set the clock to 9:30.



(6) Draw the hands to show 3:30.

