



# Area on a Grid

Grade 2

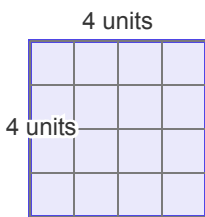
Name: \_\_\_\_\_

Find the area in square units.

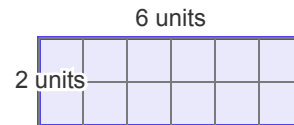
Count the number of shaded squares to find the area.

**Example:** Area = 6 sq units

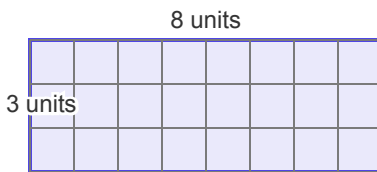
(1)



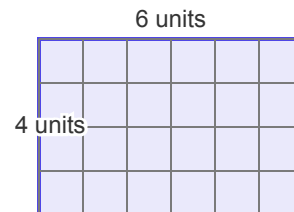
(2)



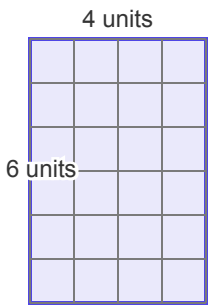
(3)



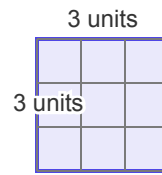
(4)



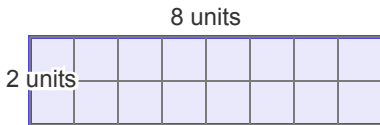
(5)



(6)



(7)



(8)

