



Area Word Problems: With Diagrams

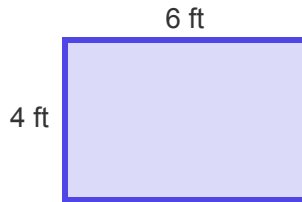
Grade 2

Name: _____

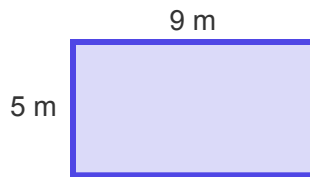
Read the story and find the area.

Tip: Area of a rectangle = length \times width.

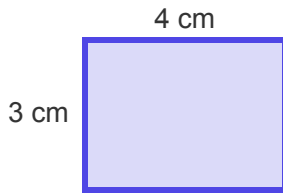
(1) What is the area of the garden? 🌳



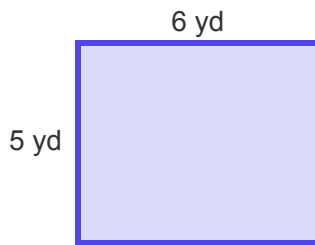
(2) Find the area of the classroom floor. 🏫



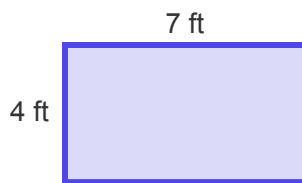
(3) Calculate the area of the postage stamp. ✉



(4) What is the area of the small field? 🌄



(5) Determine the area of the table top. 🍴



(6) Find the area of the picture frame. 