



Understanding Multiplication: Arrays to Multiplication Sentences


Grade 2

Name: _____

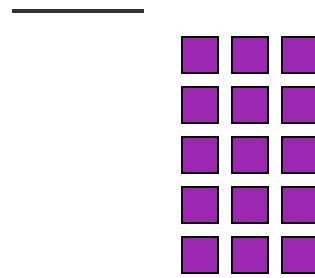
Write two multiplication sentences for each array.

Example: If there are 3 rows of 4 circles, you can write: $3 \times 4 = 12$ AND $4 \times 3 = 12$

(1) _____ \times _____ = _____
and _____ \times _____ = _____



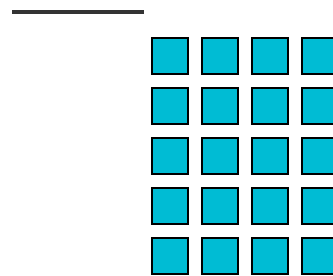
(2) _____ \times _____ = _____
and _____ \times _____ = _____




(3) _____ \times _____ = _____
and _____ \times _____ = _____



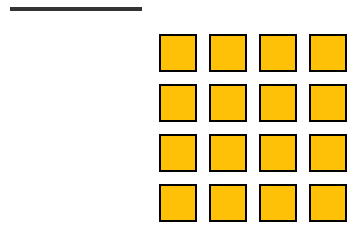
(4) _____ \times _____ = _____
and _____ \times _____ = _____



(5) $\underline{\quad} \times \underline{\quad} = \underline{\quad}$
and $\underline{\quad} \times \underline{\quad} = \underline{\quad}$



(6) $\underline{\quad} \times \underline{\quad} = \underline{\quad}$
and $\underline{\quad} \times \underline{\quad} = \underline{\quad}$



(7) $\underline{\quad} \times \underline{\quad} = \underline{\quad}$
and $\underline{\quad} \times \underline{\quad} = \underline{\quad}$



(8) $\underline{\quad} \times \underline{\quad} = \underline{\quad}$
and $\underline{\quad} \times \underline{\quad} = \underline{\quad}$

