



## Concepts of Time: Choosing Appropriate Units of Time


Grade 2

Name: \_\_\_\_\_


Choose the best unit of time.

Use your best guess for each activity.

(1) What time is shown on the clock? \_\_\_\_\_




(2) Lunchtime is at this hour. What time is it? \_\_\_\_\_




(3) If it is 3:00 now and you read for 30 minutes, what time will it be?

\_\_\_\_\_




(4) The movie ends at 5:00. If it was 1 hour long, what time did it start?

\_\_\_\_\_



(5) The bus arrives at this time. What time is it? \_\_\_\_\_



(6) If you start playing at 6:30 and play for 1 hour, what time will you finish? \_\_\_\_\_

