








Counting Coins: Count Pennies and Nickels





Grade 2

Name: _____

Count coins. Write total amount (¢ or \$).

Example:    = 7¢ or \$0.07

(1)      = _____

(2)        = _____



(3)        = _____

(4)          = _____

(5)       = _____

(6)         = _____

(7)         = _____

(8)        = _____

(9)         = _____



(10) 1¢ 5¢ 1¢ 5¢ 1¢ 5¢ 5¢ 1¢ = _____

(11) 5¢ 1¢ 5¢ 1¢ 1¢ 5¢ 1¢ 5¢ = _____

