



## Division Word Problems: Division: Sharing and Equal Groups

Grade 2

Name: \_\_\_\_\_

Solve division word problems. Show your work.

**Example:** Maria has 15 apples. She puts them into 5 baskets equally. How many apples are in each basket?  $15 \div 5 = 3$  apples

- (1) Sarah has 30 toy cars. She wants to share them equally among 6 friends. How many toy cars does each friend get? 🚗

---

- (2) Mark has 42 stickers. He puts them into 7 sticker books with the same number in each book. How many stickers are in each book?



---


- (3) A bag has 56 candies. If 8 children share them equally, how many candies does each child get? 🍬

---


- (4) There are 63 apples to be packed into 9 baskets, with an equal number in each. How many apples are in each basket? 🍏

---




(5) The teacher has 80 pencils. She divides them equally among 10 groups of students. How many pencils does each group get? 


---

(6) Mom baked 48 cookies. She wants to put them onto 6 plates, with the same number on each plate. How many cookies are on each plate? 

---

(7) A florist has 35 flowers. She makes 7 equal bouquets. How many flowers are in each bouquet? 

---

(8) The library has 72 new books. They are arranged equally on 8 shelves. How many books are on each shelf? 

---

