



## Estimating and measuring (centimeters)


Grade 2

Name: \_\_\_\_\_

Read each problem. Use the clues to figure out how long each thing is.

(1) Estimate the length of a crayon . Then measure it. Estimate:  
\_\_\_\_\_ cm

---


(2) Estimate the length of a glue stick . Then measure it. Estimate:  
\_\_\_\_\_ cm

---


(3) Estimate the length of a block eraser . Then measure it.  
Estimate: \_\_\_\_\_ cm

---




(4) Estimate the length of an unsharpened pencil  . Then measure it. Estimate: \_\_\_\_\_ cm

---

(5) Estimate the length of a house key  . Then measure it. Estimate: \_\_\_\_\_ cm

---

(6) Estimate the length of a toothbrush  . Then measure it. Estimate: \_\_\_\_\_ cm

---

