




## Estimating and measuring (inches)


Grade 2

Name: \_\_\_\_\_


Read the story problem. Use the clues to figure out the length of the described object.

(1) Estimate the length of a marker . Then measure it. Estimate:  
\_\_\_\_\_ in

---

(2) Estimate the length of a pair of scissors . Then measure it.  
Estimate: \_\_\_\_\_ in

---

(3) Estimate the length of a ruler . Then measure it. Estimate:  
\_\_\_\_\_ in

---



(4) Estimate the length of a paintbrush 🖌️ . Then measure it.  
Estimate: \_\_\_\_\_ in

---

(5) Estimate the length of a stapler 📎 . Then measure it. Estimate:  
\_\_\_\_\_ in

---

(6) Estimate the length of a glue bottle 🧴 . Then measure it.  
Estimate: \_\_\_\_\_ in

---

