



# Identify 2D Shapes

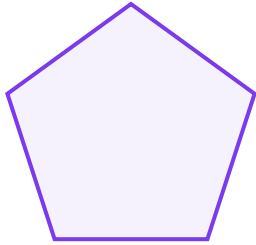
Grade 2

Name: \_\_\_\_\_

Name the shape shown.

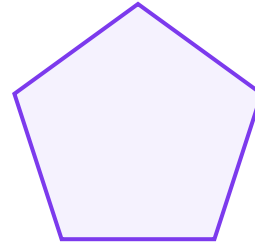
Identify the shape by counting its sides and corners.

(1)



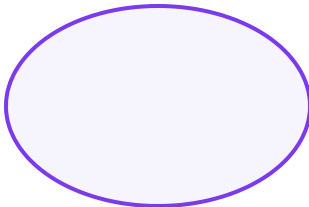
- (A) pentagon (B) rectangle (C) square  
(D) triangle

(2)




- (A) circle (B) oval (C) pentagon  
(D) rectangle

(3)



- (A) hexagon (B) oval (C) pentagon  
(D) rectangle

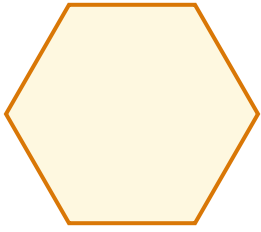
(4)



- (A) circle (B) hexagon (C) oval  
(D) triangle




(5)




- (A) circle (B) hexagon (C) pentagon  
(D) square

(6)



- (A) circle (B) hexagon (C) oval  
(D) rectangle

(7)



- (A) circle (B) diamond (C) hexagon  
(D) triangle

(8)



- (A) circle (B) hexagon (C) rectangle  
(D) square

