



Equal parts of a whole: Identify Numerators and Denominators

Grade 2


Name: _____

What is the numerator and denominator?

(1)




(2)



(3)




(4)



(5)



(6)



(7)



(8)

