



Identifying 3D Shapes

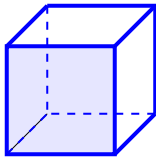
Grade 2

Name: _____

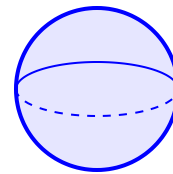
Name the three-dimensional shape.

Cube: 6 square faces. Sphere: round like a ball. Cylinder: like a can. Cone: like an ice cream cone. Rectangular Prism: like a box. Pyramid: square base, point at top.

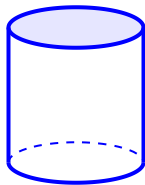
(1) What shape is this 3D object?



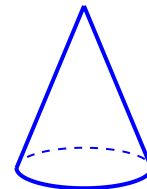
(2) Identify the 3D shape shown:



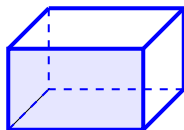
(3) This 3D shape is a



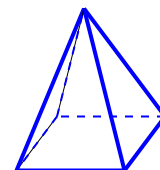
(4) Name this 3D shape:



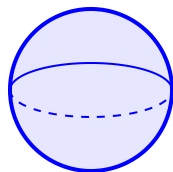
(5) What kind of prism is this?



(6) This 3D shape is a



(7) Which 3D shape has only one curved surface and no vertices?



(8) Identify the 3D shape with 6 faces, 12 edges, and 8 vertices:

