




Identifying Shapes

Grade 2

Name: _____

Identify the shape. Choose the name.


Count the sides and corners of each shape to help identify it. Remember: triangles have 3 sides, quadrilaterals have 4.



Example: What shape is this?

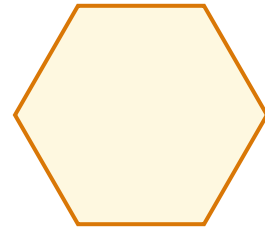
Answer: Square

(1)



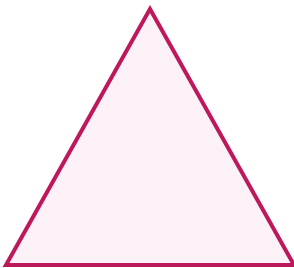
- (A) circle (B) hexagon (C) square
(D) triangle

(2)




- (A) hexagon (B) oval (C) pentagon
(D) triangle

(3)



- (A) circle (B) pentagon (C) rectangle
(D) triangle

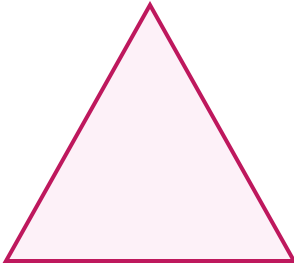
(4)



- (A) circle (B) diamond (C) rectangle
(D) triangle




(5)



- (A) oval (B) pentagon (C) rectangle
(D) triangle

(6)



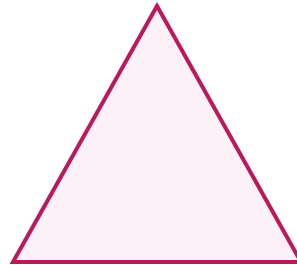
- (A) circle (B) diamond (C) hexagon
(D) oval

(7)



- (A) hexagon (B) oval (C) pentagon
(D) rectangle

(8)



- (A) diamond (B) hexagon (C) square
(D) triangle

