





Measuring in non-standard units & inches



Grade 2



Name: _____

Read the story problem. Use the clues to figure out the length of the described object.

Example: 6 blocks (where 2 blocks = 1 inch) means $6 / 2 = 3$ inches. Answer: 3 inches

(1) The pencil  is 12 blocks long. 2 blocks  = 1 inch. How long is the pencil? _____ inches

(2) The crayon  is 14 blocks long. 2 blocks  = 1 inch. How long is the crayon? _____ inches

(3) The toy car  is 16 blocks long. 2 blocks  = 1 inch. How long is the toy car? _____ inches



(4) The paintbrush 🎨 is 18 blocks long. 2 blocks 🧱 = 1 inch. How long is the paintbrush? _____ inches

(5) The book 📖 is 22 blocks long. 2 blocks 🧱 = 1 inch. How long is the book? _____ inches

(6) The ruler 📏 is 24 blocks long. 2 blocks 🧱 = 1 inch. How long is the ruler? _____ inches

