



Understanding Multiplication: Multiplication with Arrays - Count and Multiply


Grade 2

Name: _____


Count array shapes. Write equation. Find total.

Example: 2 rows \times 3 circles = $2 \times 3 = 6$ circles total


(1) _____ rows \times _____ in
each row = _____ \times _____
= _____




(2) _____ rows \times _____ in
each row = _____ \times _____
= _____




(3) _____ rows \times _____ in
each row = _____ \times _____
= _____




(4) _____ rows \times _____ in
each row = _____ \times _____
= _____



(5) _____ rows × _____ in
 each row = _____ × _____
 = _____



(6) _____ rows × _____ in
 each row = _____ × _____
 = _____



(7) _____ row × _____ in the
 row = _____ × _____ = _____



(8) _____ rows × _____ in
 each row = _____ × _____
 = _____

