

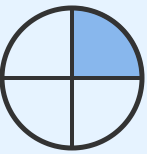


Understanding Fractions: Name That Fraction!


Grade 2

Name: _____

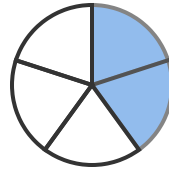
Write the fraction for the shaded parts.

Example:  = $\frac{1}{4}$


(1)



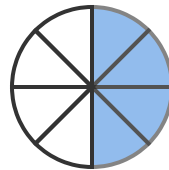
(2)



(3)



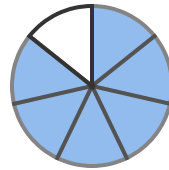
(4)



(5)

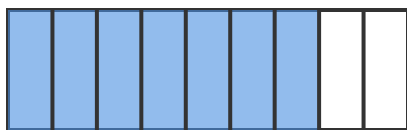


(6)





(7)



(8)

