



Perimeter on a Grid

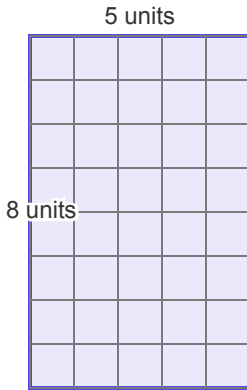
Grade 2

Name: _____

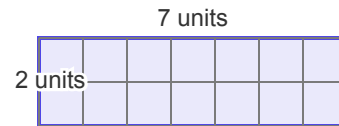
Count units around shape to find perimeter.

Formula: $P = w + h + w + h = 2 \times (w + h)$

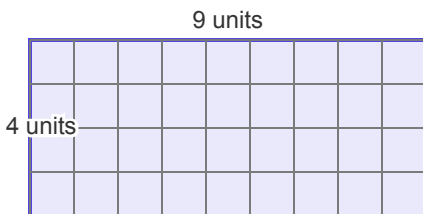
(1) Perimeter = _____ units



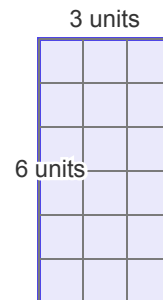
(2) Perimeter = _____ units



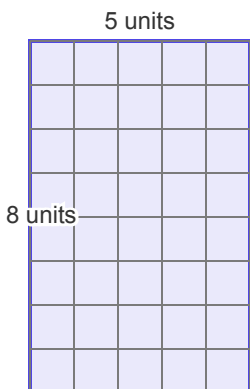
(3) Perimeter = _____ units



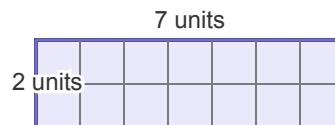
(4) Perimeter = _____ units



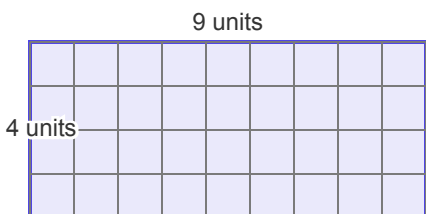
(5) Perimeter = _____ units



(6) Perimeter = _____ units



(7) Perimeter = _____ units



(8) Perimeter = _____ units

