



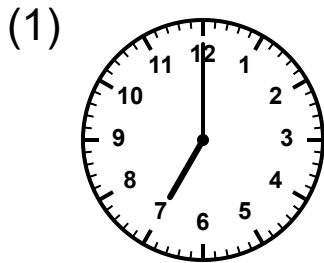
# Clocks - Telling time: Reading Clocks: Full Hours

Grade 2

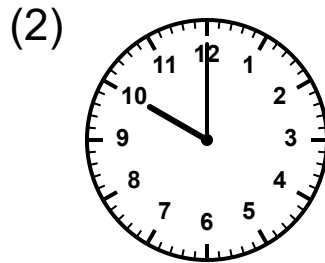
Name: \_\_\_\_\_

Read the clock and write the time.

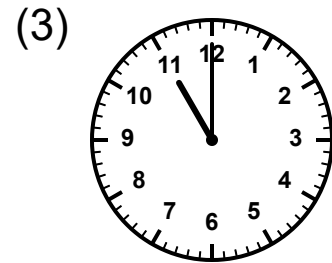
Check where the hour hand is pointing. The minute hand should be at 12 for whole hours.



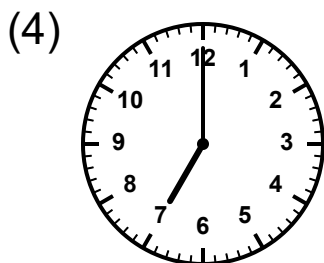
\_\_\_\_\_



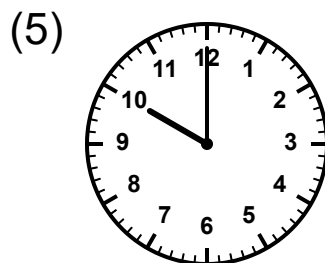
\_\_\_\_\_



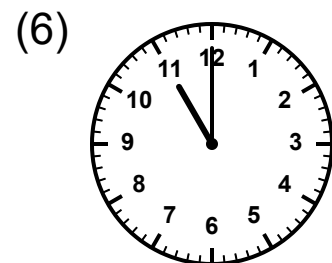
\_\_\_\_\_



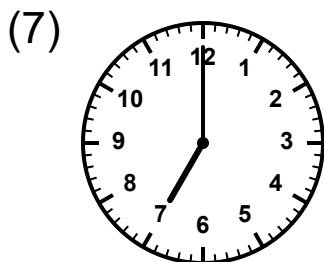
\_\_\_\_\_



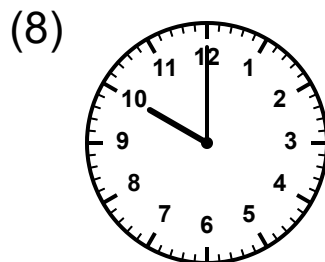
\_\_\_\_\_



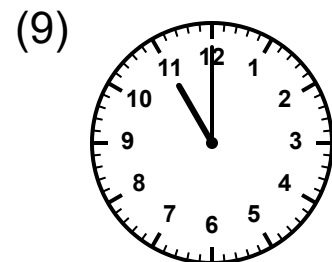
\_\_\_\_\_



\_\_\_\_\_



\_\_\_\_\_



\_\_\_\_\_

