



Reading Thermometers

Grade 2

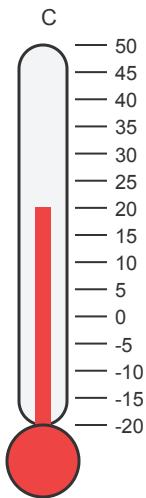
Name: _____

Read each thermometer and write the temperature.

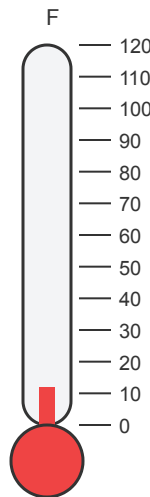
Look at the level of the red liquid. Pay attention to the scale (counting by 1s, 2s, or 5s).

Example: Temp = 72 °F

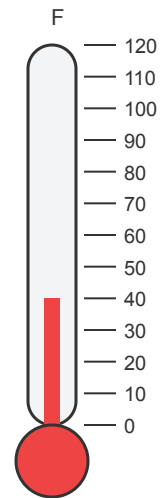
(1) What is the temperature reading?



(2) Read the thermometer. What temperature does it show?

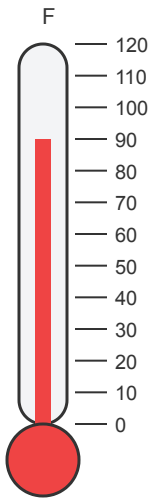


(3) What does the thermometer measure?

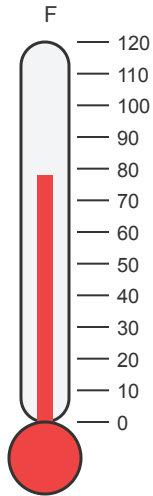




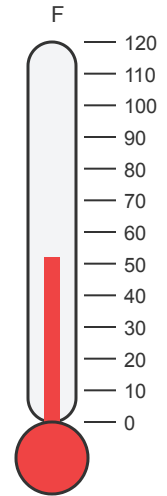
(4) What temperature is shown on the thermometer?



(5) What is the temperature reading?

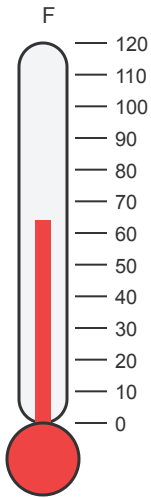


(6) Read the thermometer. What temperature does it show?





(7) What does the thermometer measure?



(8) What temperature is shown on the thermometer?

