



## Clocks - Drawing time: Represent Time to the Quarter Hour on Analog Clocks

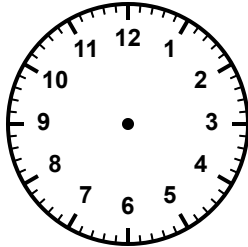
Grade 2

Name: \_\_\_\_\_


Draw clock hands to show the given time.

For each time, draw the hour hand to the correct spot and the minute hand to 3, 6, 9, or 12.

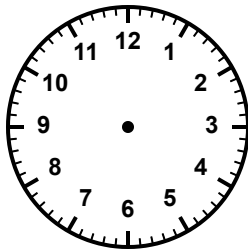
(1) Draw the hands to show 7:00




(2) Draw the hands to show 5:15



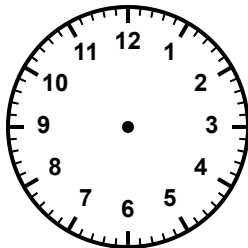
(3) Draw the hands to show  
11:30



(4) Draw the hands to show 2:45



(5) Draw the hands to show 4:00



(6) Draw the hands to show 8:15

