



Subtraction in Sports - Records and Statistics

Grade 2

Name: _____

Subtract to solve sports statistics problems.

Example: A player scored 35 points last game and 28 points this game. How many more points did they score last game? $35 - 28 = 7$. Answer: 7

(1) A runner finished a race in 125 seconds. The winner finished in 98 seconds. How much slower was the first runner? 🏃


(2) A basketball team scored 87 points in the first half and 73 points in the second half. How many more points did they score in the first half? 🏀


(3) A football player ran for 150 yards in one game. His friend ran for 120 yards in another game. What is the difference in their yards? 🏈




(4) A swimmer completed 200 laps last week. This week, she completed 175 laps. How many fewer laps did she swim this week?



(5) A baseball player had 315 hits last season. This season, he had 280 hits. How many more hits did he have last season? 

(6) A golfer scored 78 on the first day of a tournament and 72 on the second day. How many fewer strokes did he take on the second day? 

(7) A cyclist rode 450 miles in May. In June, she rode 390 miles. How many more miles did she ride in May? 



(8) A weightlifter lifted 275 pounds last year. This year, he lifted 290 pounds. How many more pounds did he lift this year? 🏆

