




## Same Fractions, Different Looks: Twin Fractions

Grade 2

Name: \_\_\_\_\_

Compare models. Write YES or NO.

Compare the shaded parts in both shapes. If they show the same amount (like  $\frac{1}{2}$  and  $\frac{2}{4}$ ), write YES. If they show different amounts, write NO.

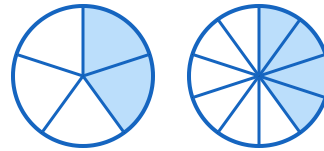
Example:  Are these the same fraction? YES (both show  $\frac{1}{2}$ )

(1)



\_\_\_\_\_

(2)



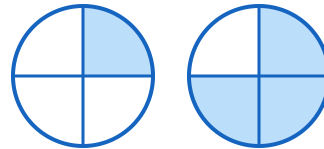
\_\_\_\_\_

(3)



\_\_\_\_\_

(4)



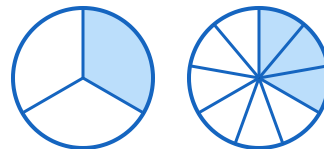
\_\_\_\_\_

(5)



\_\_\_\_\_

(6)



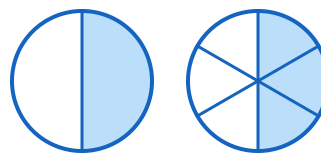
\_\_\_\_\_



(7)



(8)



(9)



(10)

