




## Units of length (inches & feet)


Grade 2



Name: \_\_\_\_\_


Convert units of length between inches and feet. Remember: 1 foot equals 12 inches.

Multiply feet solely by 12 to get inches. Divide inches by 12 to get feet. **Example:** 3 feet = 36 inches


(1) A table  is 4 feet long. How many inches is that?  
\_\_\_\_\_ inches


(2) A ribbon  is 36 inches long. How many feet is that?  
\_\_\_\_\_ feet

(3) Which is longer: A book  that is 18 inches long or a ruler  that is 1 foot long? \_\_\_\_\_

(4) A jump rope  is 5 feet long. That is the same as how many inches? \_\_\_\_\_ inches



(5) Sarah has a string  that is 48 inches long. How many feet long is her string? \_\_\_\_\_ feet

(6) Which is shorter: A desk  that is 2 feet wide or a window  that is 20 inches wide? \_\_\_\_\_

