




Concepts of Time: Units of Time: Multiple Choice

Grade 2

Name: _____


Choose the best answer.

(1) What time is shown on the clock? _____



(A) 6:00 (B) 7:00 (C) 8:00


(2) What time is shown on the clock? _____



(A) 1:00 (B) 1:30 (C) 2:00




(3) What time is shown on the clock? _____



- (A) 10:00 (B) 10:15 (C) 10:30


(4) A drawing class starts at 4:00 PM and lasts for 45 minutes. What time does it finish? _____



- (A) 4:30 (B) 4:45 (C) 5:00




(5) If a school bell rings at 9:10 AM, and it rang 10 minutes after class started, what time did class begin? _____



- (A) 8:50 (B) 9:00 (C) 9:10

(6) A train leaves at 5:30 PM and the trip takes 35 minutes. What time does the train arrive? _____



- (A) 5:55 (B) 6:00 (C) 6:05

