



Units of weight (customary, metric)








Grade 2

Name: _____

Choose the most appropriate unit to measure the weight of the object.

Use Grams/Ounces for light objects. Use Kilograms/Pounds for heavy objects. **Example:** Car -> Kilograms.

Feather -> Grams.

- (1) To weigh a small pencil , which unit is best?
(A) Kilograms (B) Grams (C) Pounds
- (2) Which unit is used for very heavy things like a car ?
(A) Ounces (B) Grams (C) Kilograms
- (3) Which is lighter: a 2-pound book  or a 2-ounce feather ?
(A) The book (B) The feather (C) They are the same
- (4) If you want to weigh a small piece of candy , which unit would you use?
(A) Kilograms (B) Grams (C) Pounds
- (5) Which unit is heavier?
(A) 1 Pound (B) 1 Ounce (C) 1 Gram
- (6) A dog  weighs 15 pounds. A cat  weighs 8 pounds. How much heavier is the dog?
(A) 7 pounds (B) 8 pounds (C) 15 pounds

