




Addition with Money: Shopping Problems - Set A


Grade 3


Name: _____


Add prices, find total cost, include dollar sign.


Example: A pencil costs \$0.75 and an eraser costs \$0.50. How much is the total? Answer: \$1.25

(1) Liam buys a storybook for \$7.85 and a workbook for \$4.60. How much does he spend in total? 

(2) Mia buys a toy robot for \$9.75 and a board game for \$6.50. What is the total cost? 

(3) Carlos buys an apple for \$2.99 and a juice box for \$1.75. How much does he pay? 

(4) Emily buys a paint set for \$11.25 and a brush pack for \$5.90. What is her total? 

(5) David buys a t-shirt for \$15.60 and socks for \$8.75. How much does he spend? 



(6) Anya buys a small plant for \$3.45, seeds for \$2.80, and a trowel for \$1.99. What is the total cost? 🌸

(7) Jessica buys milk for \$4.70 and bread for \$3.85. How much does she spend at the store? 🛒

(8) Mark buys a new backpack for \$6.25, a lunchbox for \$3.90, and a pencil case for \$0.75. What is the total? 🎒

