



Addition Word Problems (1–3 digits)

Grade 3

Name: _____


Add the numbers to find the total. Your answers will be 199 or less. Make your numbers easy to read and write a sentence for your answer. You can do it!


(1) Maria picked 35 red flowers and 25 yellow flowers. How many flowers did she pick in total? 🌸

(2) A bus carried 45 passengers in the morning and 32 in the afternoon. How many passengers did it carry all day? 🚌


(3) Tom collected 75 stamps and then bought 55 more. How many stamps does Tom have now? 📄



(4) A library received 85 new fiction books and 43 new non-fiction books. What is the total number of new books? 

(5) Sarah baked 125 chocolate chip cookies and 52 oatmeal cookies. How many cookies did she bake altogether? 

(6) A farmer planted 58 apple trees and 21 pear trees. How many fruit trees did the farmer plant? 

(7) There are 25 blue balloons, 30 red balloons, and 45 yellow balloons. How many balloons are there in total? 



(8) A store sold 65 toys on Saturday and 75 toys on Sunday. How many toys were sold over the weekend? 🧸

