



Area Word Problems: With Diagrams

Grade 3

Name: _____

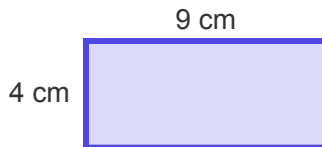
Read the story and find the area.

Tip: Area of a rectangle = length \times width.

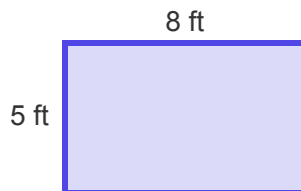
- (1) A garden bed is 7 feet long and 3 feet wide. What is its area? 🌱



- (2) A painting is 9 cm long and 4 cm wide. What is its area? 🖼️

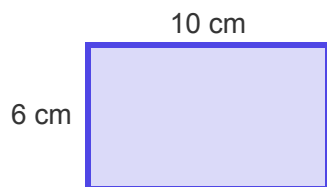


- (3) A picnic blanket is 8 feet long and 5 feet wide. What is its area? 🧺

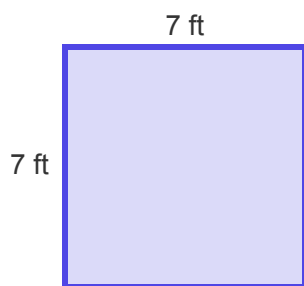




(4) A piece of paper is 10 cm long and 6 cm wide. What is its area? 📄



(5) A floor tile is 7 feet long and 7 feet wide. What is its area? 🏠



(6) A small table top is 12 cm long and 5 cm wide. What is its area? ☕

