



Classifying Quadrilaterals (Multiple Choice)

Grade 3

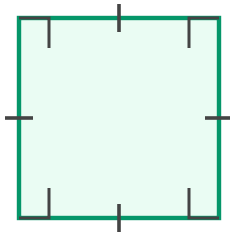
Name: _____

Choose the correct quadrilateral.

Square: 4 equal sides, 4 right angles. **Rectangle:** 4 right angles. **Parallelogram:** 2 pairs of parallel sides.

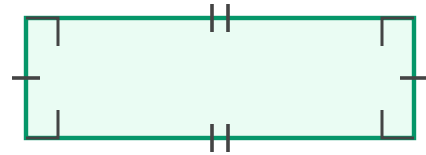
Rhombus: 4 equal sides. **Trapezoid:** 1 pair of parallel sides.

(1) What quadrilateral is shown?



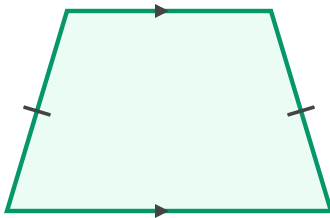
(A) rectangle (B) square (C) trapezoid

(2) Classify this quadrilateral.



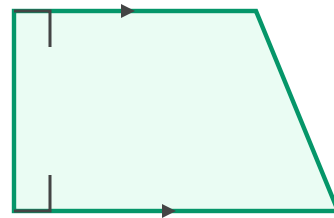
(A) rectangle (B) square (C) trapezoid

(3) Classify this quadrilateral.



(A) rectangle (B) square (C) trapezoid

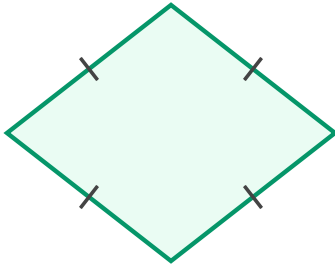
(4) Classify this quadrilateral.



(A) rectangle (B) square (C) trapezoid

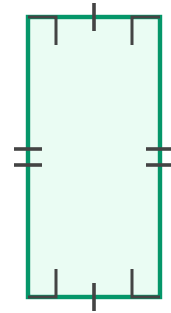


(5) What quadrilateral is shown?



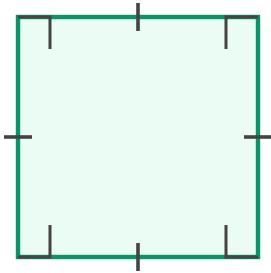
(A) rectangle (B) square (C) trapezoid

(6) What type of quadrilateral is shown?



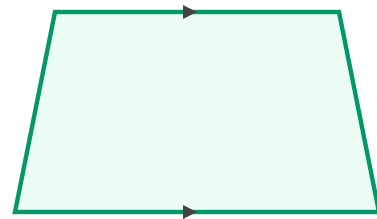
(A) rectangle (B) square (C) trapezoid

(7) Classify this quadrilateral.



(A) rectangle (B) square (C) trapezoid

(8) Classify this quadrilateral.



(A) rectangle (B) square (C) trapezoid

