



Measurement - Time: Convert Minutes and Hours

Grade 3


Name: _____

1 hour = 60 minutes


60 minutes = 1 hour

Example: 2 hr = 120 min


(1) What time will it be 25 minutes after 3:10? _____




(2) What time will it be 30 minutes after 4:40? _____




(3) What time will it be 2 hours after 7:05? _____




(4) What time will it be 1 hour and 40 minutes after 1:20? _____




(5) What time was it 35 minutes before 6:50? _____




(6) What time was it 25 minutes before 9:10? _____




(7) What time was it 3 hours before 11:30? _____




(8) What time was it 1 hour and 15 minutes before 5:00? _____




(9) What time will it be 150 minutes after 10:00? _____



(10) What time was it 75 minutes before 1:45? _____



(11) A movie starts at 6:20 PM and lasts for 2 hours and 50 minutes. What time will the movie end?



(12) A train arrived at 11:00 AM after a journey of 1 hour and 30 minutes. What time did the train depart? _____

