



## Measurement - Time: Convert Seconds and Minutes

Grade 3

Name: \_\_\_\_\_


Convert between minutes and seconds.

60 seconds = 1 minute

**Example:** 2 min = 120 sec


- (1) A short video started playing at 7:05. It lasted for 120 seconds. What time did the video end?

\_\_\_\_\_




- (2) A student began reading at 10:30. They read for 300 seconds. What time did they stop reading?

\_\_\_\_\_




- (3) A song started at 1:40. It played for 60 seconds. What time did the song finish?

\_\_\_\_\_




- (4) A train was scheduled to depart at 5:50. It was delayed by 180 seconds. What time did the train actually depart?


\_\_\_\_\_




(5) A short break began at 2:00. It lasted for 420 seconds. What time did the break end? \_\_\_\_\_




(6) A game started at 11:10. The first round took 240 seconds. What time did the first round finish? \_\_\_\_\_




(7) A cooking timer was set for 360 seconds. If it started at 8:25, what time did it ring? \_\_\_\_\_




(8) A presentation began at 12:00. It lasted for 540 seconds. What time did the presentation conclude? \_\_\_\_\_




(9) A short walk started at 3:15. It took 600 seconds. What time did the walk end? \_\_\_\_\_



(10) A craft project started at 9:00. It took 720 seconds to complete. What time was it finished? \_\_\_\_\_



(11) A commercial break lasted for 480 seconds. If it started at 6:05, what time did it end? \_\_\_\_\_



(12) A quick meeting began at 4:30. It ran for 660 seconds. What time did the meeting finish? \_\_\_\_\_

