




Division Word Problems: Division: Array Problems


Grade 3


Name: _____


Solve array problems. Write division equation with units.

Example: A garden has 20 flowers planted in 5 rows. How many flowers are in each row? Answer: $20 \div 5 = 4$ flowers

- (1) A librarian arranged 21 books on 3 shelves with an equal number on each. How many books are on each shelf? 

- (2) A baker made 42 cookies and placed them in 6 equal rows on a tray. How many cookies are in each row? 

- (3) A collector has 32 stamps arranged on a page in 4 equal rows. How many stamps are in each row? 

- (4) An auditorium has 45 chairs set up in 5 equal rows. How many chairs are in each row? 



(5) A toy store received 15 small toys and arranged them equally into 3 display boxes. How many toys are in each box? 🧸

(6) A fruit stand has 49 oranges arranged in 7 equal rows in a large basket. How many oranges are in each row? 🍊

(7) A sheet of stickers has 25 stickers arranged in 5 equal rows. How many stickers are in each row? ✨

(8) A stationery box contains 44 pencils arranged in 4 equal rows. How many pencils are in each row? 🖋️

