



Elapsed Time

Grade 3

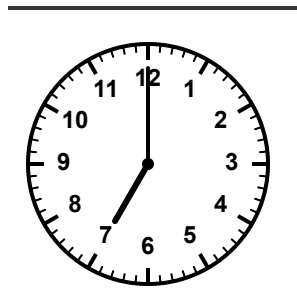
Name: _____

Find the elapsed time.


Subtract the start time from the end time.

Example: Start: 2:00 PM, End: 4:30 PM, Elapsed: 2 hr 30 min

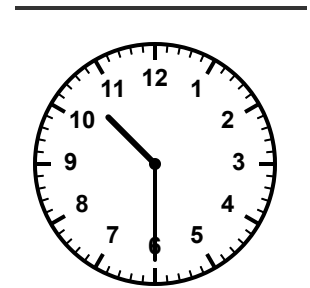
- (1) Start: 7:00 AM,
End: 9:45 AM,
Elapsed:



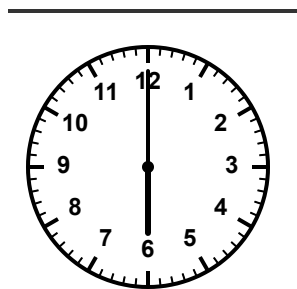
- (2) Start: 1:15 PM,
End: 3:00 PM,
Elapsed:



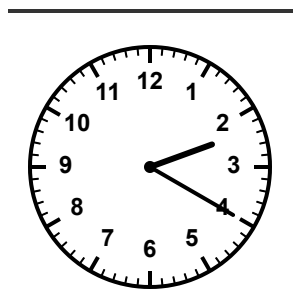
- (3) Start: 10:30 AM,
End: 1:00 PM,
Elapsed:




- (4) Start: 6:00 PM,
End: 8:50 PM,
Elapsed:




- (5) Start: 2:20 PM,
End: 5:10 PM,
Elapsed:




- (6) Start: 8:45 AM,
End: 11:30 AM,
Elapsed:




(7) Start: 3:05 PM,
End: 6:00 PM,
Elapsed:



(8) Start: 11:00 AM,
End: 2:15 PM,
Elapsed:



(9) Start: 7:50 PM,
End: 10:20 PM,
Elapsed:



(10) Start: 4:10 AM,
End: 6:35 AM,
Elapsed:

