



Finding Area by Counting Squares

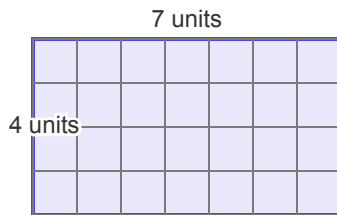
Grade 3

Name: _____

Count the squares inside to find the area.

Example: Example: a 3-row by 4-column rectangle has $3 \times 4 = 12$ square units.

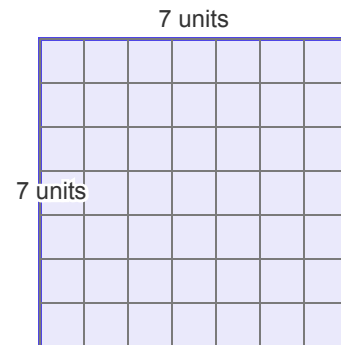
(1)



(A) 27 square units (B) 28 square units

(C) 30 square units (D) 32 square units

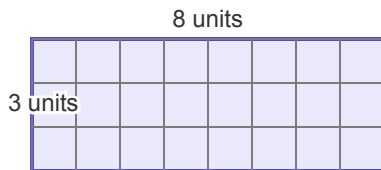
(2)



(A) 47 square units (B) 49 square units

(C) 51 square units (D) 53 square units

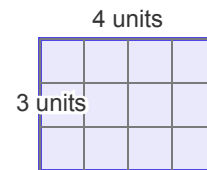
(3)



(A) 15 square units (B) 19 square units

(C) 24 square units (D) 26 square units

(4)

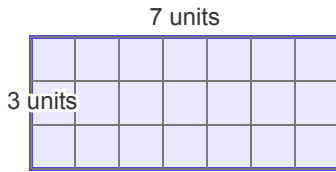


(A) 9 square units (B) 12 square units

(C) 15 square units (D) 17 square units

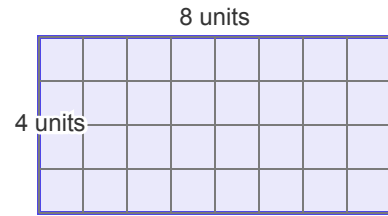


(5)



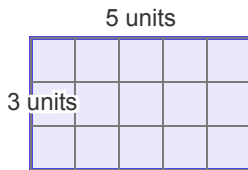
- (A) 18 square units (B) 21 square units
(C) 26 square units (D) 28 square units

(6)



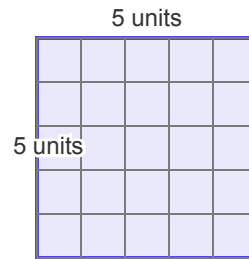
- (A) 30 square units (B) 32 square units
(C) 36 square units (D) 41 square units

(7)



- (A) 5 square units (B) 9 square units
(C) 15 square units (D) 20 square units

(8)



- (A) 20 square units (B) 24 square units
(C) 25 square units (D) 31 square units

