

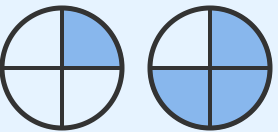


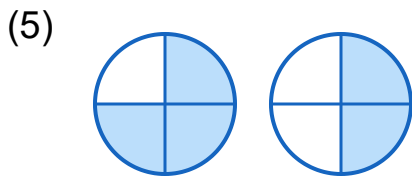
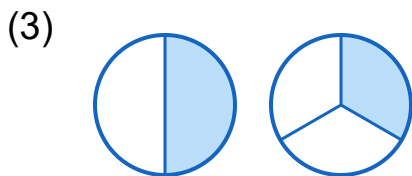
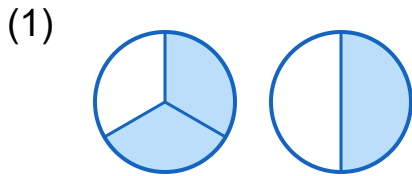
Which Fraction is Bigger?: Fraction Comparison

Grade 3

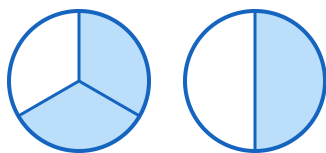
Name: _____

Identify the larger fraction.

Example:  Which is bigger? $\frac{3}{4}$



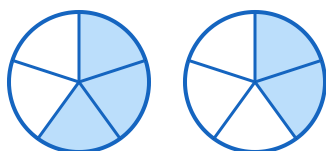
(7)



(8)



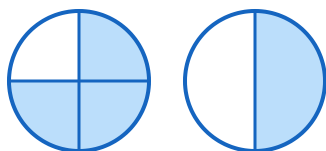
(9)



(10)



(11)



(12)

