



Visual Fractions: Fractions on a Number Line

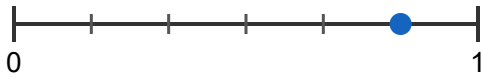
Grade 3

Name: _____

Write the fraction shown by the point on each number line.



(1)



(2)



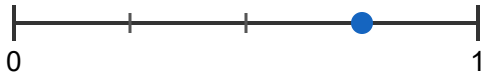
(3)



(4)



(5)



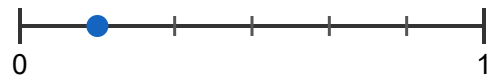
(6)



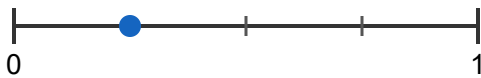
(7)



(8)



(9)



(10)

