



# Equal parts of a whole: Identify Fractions from Shaded Shapes

Grade 3

Name: \_\_\_\_\_

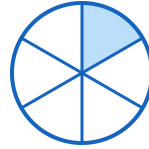
What fraction is shaded?

(1)



\_\_\_\_\_

(2)




\_\_\_\_\_

(3)



\_\_\_\_\_

(4)




\_\_\_\_\_

(5)



\_\_\_\_\_

(6)




\_\_\_\_\_

(7)



\_\_\_\_\_

(8)



\_\_\_\_\_

