



# Identifying 3D Shapes

Grade 3

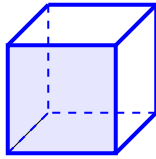
Name: \_\_\_\_\_

Name the three-dimensional shape.

Cube: 6 square faces. Sphere: round like a ball. Cylinder: like a can. Cone: like an ice cream cone. Rectangular Prism: like a box. Pyramid: square base, point at top.

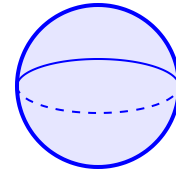
(1) What shape is shown?

\_\_\_\_\_



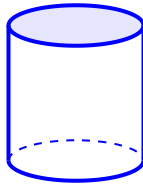
(2) Name this 3D object:

\_\_\_\_\_



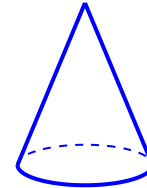
(3) Identify the shape:

\_\_\_\_\_

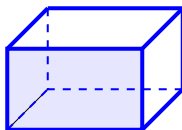


(4) This shape is a

\_\_\_\_\_

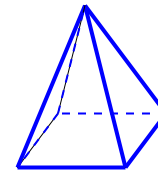


(5) What is the name of this 3D shape? \_\_\_\_\_



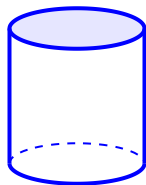
(6) The shape pictured is a

\_\_\_\_\_



(7) Which 3D shape is displayed?

---



(8) This is a

---

