



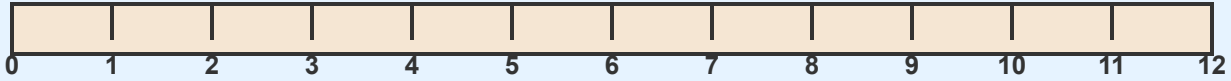
# Measure with a Ruler - Nearest Inch

Grade 3

Name: \_\_\_\_\_

Measure each object to the nearest inch.

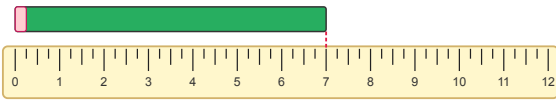
Example: How long is the pencil?



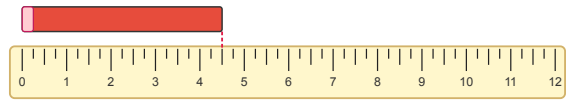
Answer: 5

inches (The pencil reaches from 0 to 5 on the ruler)

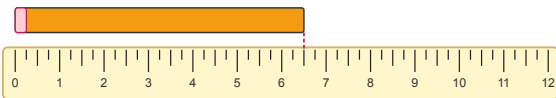
(1)



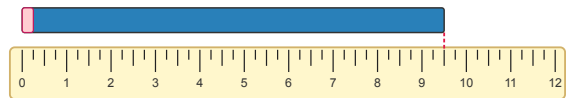
(2)



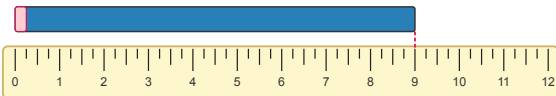
(3)



(4)



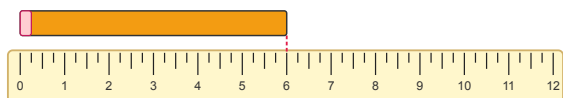
(5)



(6)

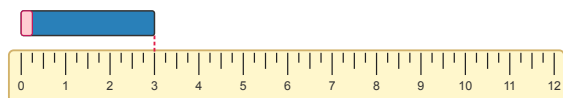


(7)



---

(8)



---

