



# Measuring Angles

Grade 3

Name: \_\_\_\_\_

Measure each angle. Write the degree measurement.

Remember: Acute angles are less than  $90^\circ$ , right angles are exactly  $90^\circ$ , obtuse angles are between  $90^\circ$  and  $180^\circ$ , and straight angles are  $180^\circ$ .

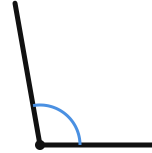
**Example:** To measure: Place protractor center on vertex, align baseline with one ray, read where other ray points.

(1)



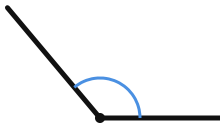
\_\_\_\_\_

(2)



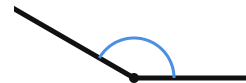
\_\_\_\_\_

(3)



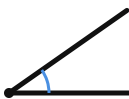
\_\_\_\_\_

(4)



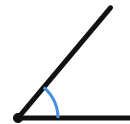
\_\_\_\_\_

(5)



\_\_\_\_\_

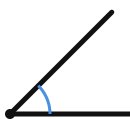
(6)



\_\_\_\_\_



(7)



---

(8)



---

