



## Division Word Problems: Multiplication and Division Word Problems (No Remainders)





Grade 3

Name: \_\_\_\_\_


Solve each word problem.

Read each problem carefully. Decide whether to multiply or divide, then write your answer.


**Example:** Example: There are 5 plates with 4 cookies on each plate.  $5 \times 4 = 20$ , so there are 20 cookies in all.

- (1) A gardener plants 9 rows of sunflowers, with 7 sunflowers in each row. How many sunflowers are there in all? \_\_\_\_\_ 
- \_\_\_\_\_
- (2) Sarah has 54 marbles and wants to share them equally among her 9 friends. How many marbles does each friend get? \_\_\_\_\_ 
- \_\_\_\_\_
- (3) There are 8 bird feeders, and each feeder has 9 birds eating from it. How many birds are there altogether? \_\_\_\_\_ 
- \_\_\_\_\_
- (4) A baker made 81 cookies and put them into 9 equal bags. How many cookies are in each bag? \_\_\_\_\_ 
- \_\_\_\_\_




(5) A school bus has 9 seats, and 6 children can sit in each seat. How many children can the bus hold? \_\_\_\_\_ 


---

(6) David has 36 toy cars and wants to put them into 9 boxes, with an equal number in each. How many cars go in each box? \_\_\_\_\_ 


---

(7) Emily buys 9 packs of stickers. Each pack has 10 stickers. How many stickers does Emily have in total? \_\_\_\_\_ 

---


(8) A farmer collects 90 apples and wants to pack them into 9 baskets equally. How many apples will be in each basket? \_\_\_\_\_ 

---


(9) A group of 9 friends each brought 5 comic books to trade. How many comic books did they bring in all? \_\_\_\_\_ 

---




(10) There are 72 pencils to be shared equally among 8 tables in a classroom. How many pencils does each table get? \_\_\_\_\_ 

---

(11) A library has 9 shelves, and each shelf holds 11 storybooks. How many storybooks are there in total? \_\_\_\_\_ 

---

(12) A pet store has 45 fish to put into 5 tanks, with an equal number in each. How many fish are in each tank? \_\_\_\_\_ 

---

