



## Multiplication Word Problems: Equal Groups to 25


Grade 3

Name: \_\_\_\_\_


Read. Write a multiplication sentence to solve.

Products  $\leq 25$ . Examples: 4 groups of 3  $\rightarrow 3 + 3 + 3 + 3 = 12$  or  $4 \times 3 = 12$ . Keep it one step.


**Example:** There are 4 boxes with 3 markers in each.  $4 \times 3 = 12$ . Answer: 12 markers.

- (1) A bird feeder has 2 sections. Each section holds 2 seeds. How many seeds are there in total? 

---

- (2) Sarah collects stamps. She has 2 pages in her album, and each page has 3 stamps. How many stamps does she have? 

---

- (3) There are 3 parking rows. Each row has 3 cars. How many cars are parked in all? 

---



(4) A gardener planted 4 rows of flowers. Each row has 3 flowers. How many flowers did the gardener plant? 🌸

---

(5) Leo has 5 sticker sheets. Each sheet has 3 stickers. How many stickers does Leo have? 🌟

---

(6) There are 4 docks at the lake. Each dock has 5 boats. How many boats are there in total? 🚤

---



(7) A field has 2 groups of butterflies. Each group has 5 butterflies. How many butterflies are in the field? 🦋

---

(8) Tom organized his marbles into 5 bags. Each bag has 4 marbles. How many marbles does Tom have? ⑧

---

