

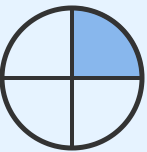


Understanding Fractions: Name That Fraction!

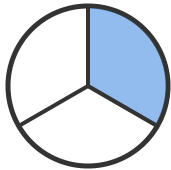
Grade 3

Name: _____

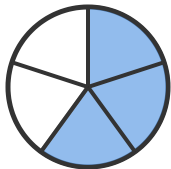
Write the fraction for the shaded parts.

Example:  = $\frac{1}{4}$

- (1) What fraction of the circle is shaded blue?




- (3) What fraction of the pie is shaded blue?



- (2) Look at the rectangle. What fraction is colored blue?

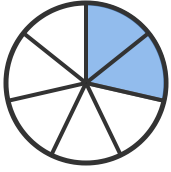


- (4) What fraction of this bar is shaded?






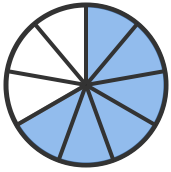
(5) What fraction of the circle is blue?



(6) How much of this rectangle is shaded blue?



(7) What fraction of the circle is shaded?



(8) What fraction of this rectangle is colored blue?

