



Perimeter of Rectangles

Grade 3

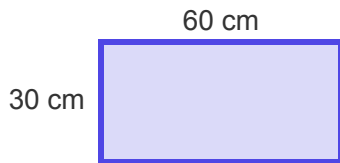
Name: _____

Calculate the perimeter.

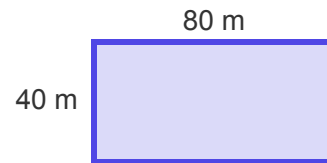
Add all the sides together to find the perimeter.

Example: Perimeter (P) = side + side + side + side

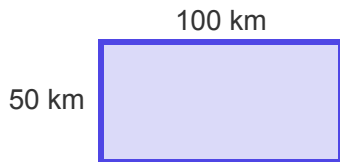
(1) Perimeter = _____ cm



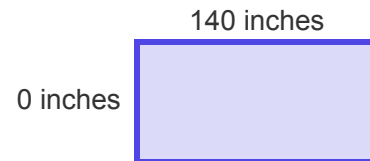
(2) Perimeter = _____ m



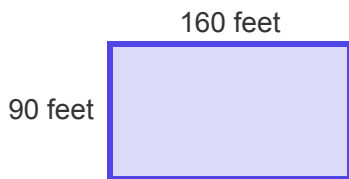
(3) Perimeter = _____ km



(4) Perimeter = _____ inches



(5) Perimeter = _____ feet



(6) Perimeter = _____ cm

