



Reading Line Graphs

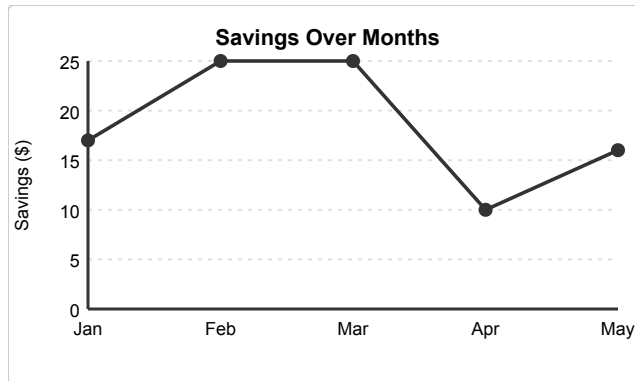
Grade 3

Name: _____

Answer questions using the line graph.

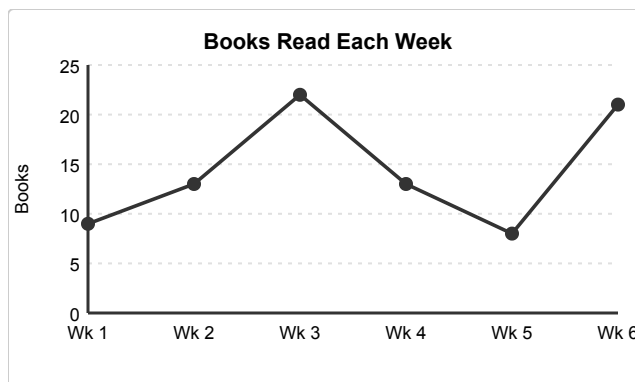
A line graph shows how something changes over time. Points are connected by lines to show the trend.

(1) What is the value at Jan?



- (A) 15 (B) 16 (C) 17 (D) 18

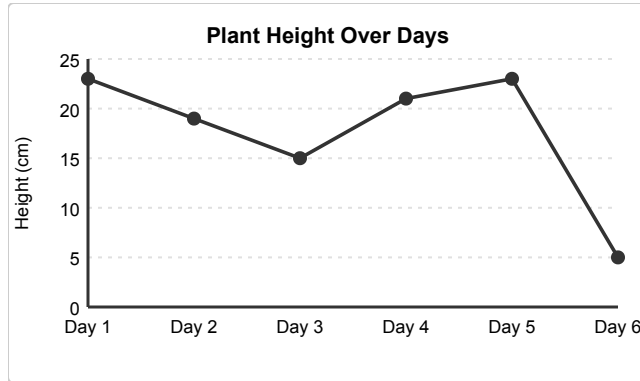
(2) What is the value at Wk 4?



- (A) 11 (B) 12 (C) 13 (D) 14

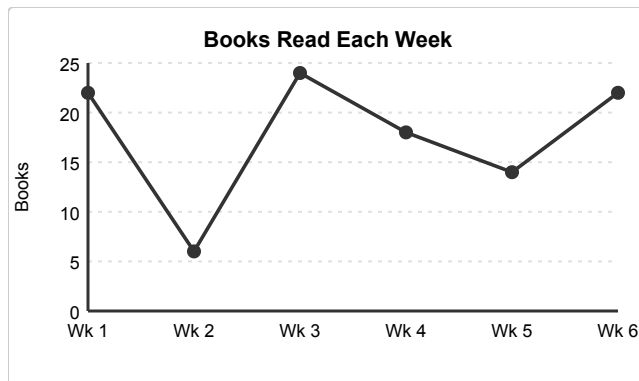


(3) What is the highest value shown on the graph?



- (A) 21 (B) 22 (C) 23 (D) 24

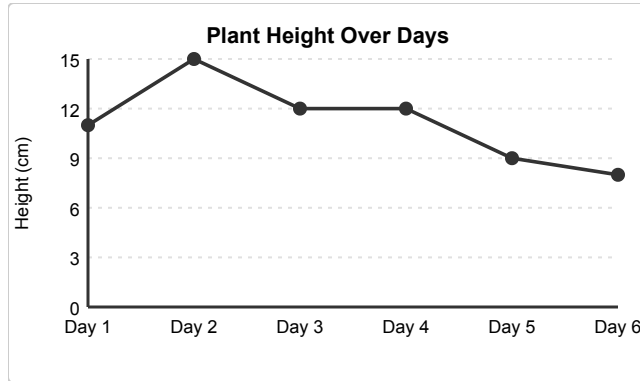
(4) What is the lowest value shown on the graph?



- (A) 4 (B) 5 (C) 6 (D) 7

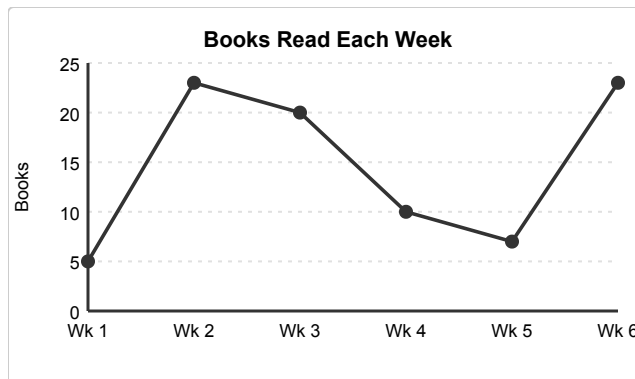


(5) What is the difference between the highest and lowest values?



- (A) 5 (B) 6 (C) 7 (D) 8

(6) How much did the value change from Wk 1 to Wk 2?



- (A) 16 (B) 17 (C) 18 (D) 19

